

Admission No: _____

Roll no. _____



BK BIRLA CENTRE FOR EDUCATION
SARALA BIRLA GROUP OF SCHOOLS
SENIOR SECONDARY CO-ED DAY CUM BOYS' RESIDENTIAL SCHOOL



POST MID TERM (2024-25)

Mathematics (041)

Invigilator Sign:

Duration: 1 Hr.

Examiner Sign:

Max. Marks: 25

Class : III

Marks Obtained

Date : 09-01-25

A. Fill in the blanks

1 x 5 = 5 M

1. 60 seconds = _____ minute.
2. Half past 5 = _____ (in numerical).
3. _____ are a quick way of keeping track of numbers in groups of five.
4. p.m. means _____
5. June 25, 2025 in numerals- _____

B. Do as directed

2 x 4 = 8 M

6. Convert into minutes

a. 10 hours

b. 8 hours

7. Match the following

The day that comes before Sunday

Friday

The day that comes after Thursday

Saturday

The day that comes before Thursday

Monday

The day that comes after Sunday

Wednesday

8. Write the time

a.




b.







c.



9. Ice cream bars are distributed among the students of class 3. Answer the questions based on the given pictograph. Key :  represents 1 ice cream bar.

Ice Cream Bars Distributed

Flavour	Number of ice cream bars
Strawberry	
Vanilla	
Chocolate	
Blackcurrant	

a. Which ice-cream flavour is distributed the least? _____

b. How many chocolate bars are distributed? _____

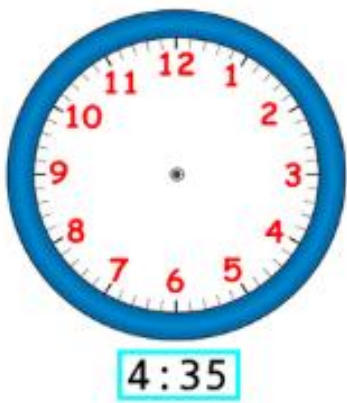
c. Which two ice creams are same in number ? _____

d. Which flavour bar is the highest? _____

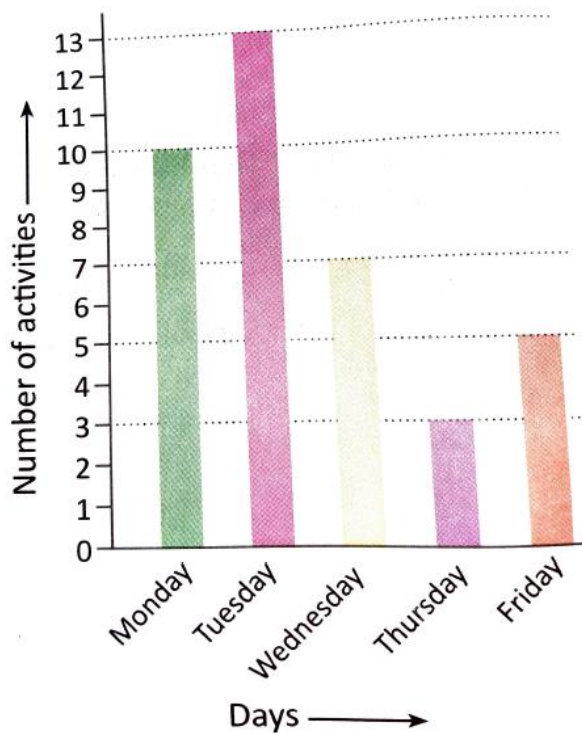
C. Solve the following

3 x 4 = 12 M

10. Draw the minute hand and the hour hands on the clock



11. Look at the bar graph showing the number of activities done in a class during a week.



- Children did the highest number of activities on _____.
- Children did the least number of activities on _____.
- The total number of activities done during the week. _____.

12. Write T for true and F for false

- The hour hand takes 12 hours to complete one round. _____
- The hour hand makes one complete round in a day. _____
- The minute hand completes one round in 12 hours. _____

d. a.m. is used to say time from 12 noon to 12 midnight. _____

e. p.m. is used to say time from 12 noon to 12 midnight. _____

f. In a clock, the short hand tell us days. _____

13. Jimmy's dance class begins at the time shown on the clock. It's a 2 hour long class. At what time does the class end?